

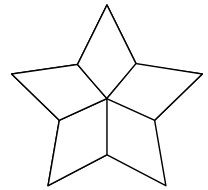
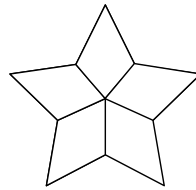
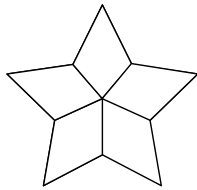

COLOREA FRACCIONES



Instrucciones: Colorea la fracción que corresponde en cada figura.



Recuerda que podemos expresar una fracción en diversas figuras, no solo en círculos o rectángulos.

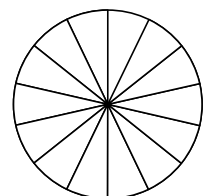
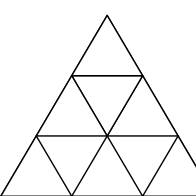
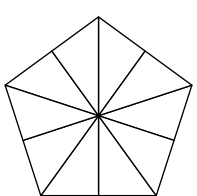
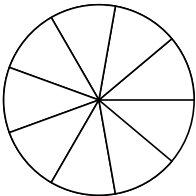


$$\frac{1}{5}$$

$$\frac{2}{5}$$

$$\frac{3}{5}$$

$$\frac{4}{5}$$

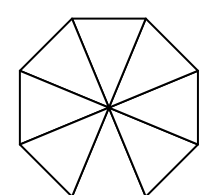
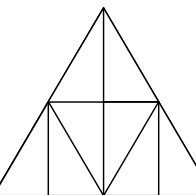
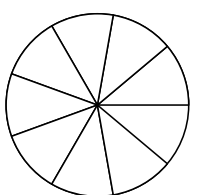
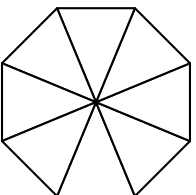


$$\frac{4}{9}$$

$$\frac{6}{10}$$

$$\frac{8}{9}$$

$$1$$



$$\frac{1}{8}$$

$$\frac{4}{5}$$

$$\frac{5}{8}$$

$$\frac{7}{8}$$